



Rewarding Learning

ADVANCED SUBSIDIARY (AS)  
General Certificate of Education  
2018

Centre Number

--	--	--	--	--

Candidate Number

--	--	--	--

# Life and Health Sciences

Assessment Unit AS 3

*assessing*

Aspects of Physical Chemistry in  
Industrial Processes



SZ031

[SZ031]

FRIDAY 18 MAY, AFTERNOON

### TIME

1 hour 30 minutes.

### INSTRUCTIONS TO CANDIDATES

Write your Centre Number and Candidate Number in the spaces provided at the top of this page.

Write your answers in the spaces provided in this question paper.

Answer **all six** questions.

### INFORMATION FOR CANDIDATES

The total mark for this paper is 75.

Figures in brackets printed down the right-hand side of pages indicate the marks awarded to each question or part question.

A Periodic Table of Elements is included in this question paper.

You may use an electronic calculator.

Quality of written communication will be assessed in Question **3(b)(i)**.

For Examiner's use only	
Question Number	Marks
1	
2	
3	
4	
5	
6	

<b>Total Marks</b>	
--------------------	--





2 (a) To create a new chemical, industrial chemists carry out experiments to find the best conditions for the reaction. They use a batch process to initially make the product. When they work out the best conditions for the reaction they set up a continuous process to manufacture the product.

(i) Give two advantages of using a **batch** process for the initial experiments.

1. \_\_\_\_\_

\_\_\_\_\_

2. \_\_\_\_\_

\_\_\_\_\_ [2]

(ii) Give two advantages of using a **continuous** process for the final manufacture of the chemical.

1. \_\_\_\_\_

\_\_\_\_\_

2. \_\_\_\_\_

\_\_\_\_\_ [2]

(b) Describe two factors that a company must take into account with regard to **waste management** when choosing a site for their production plant.

1. \_\_\_\_\_

\_\_\_\_\_

2. \_\_\_\_\_

\_\_\_\_\_ [2]

Examiner Only

Marks

Remark

**BLANK PAGE**

**(Questions continue overleaf)**

3 (a) Define the term **standard enthalpy change of combustion**.

---

---

---

 [2]

(b) (i) A student wants to carry out an experiment to find the enthalpy change of combustion of ethanol. Describe the procedure he should use and state the measurements he should record. Do not give details of any calculations required.

**You will be assessed on the quality of your written communication in this question.**

---

---

---

---

---

---

---

---

---

---

---

---

---

---

---

---

---

---

---

---

---

---

---

---

 [8]

(ii) The equation the student would use to help calculate the enthalpy change of combustion is  $Q = mc\Delta T$ .  
State the meaning of the following symbols used in this equation:

m: \_\_\_\_\_

c: \_\_\_\_\_

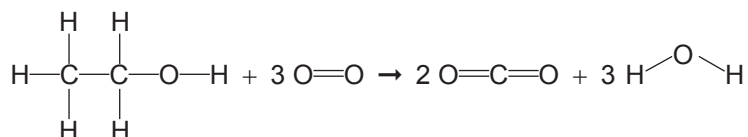
$\Delta T$ : \_\_\_\_\_ [3]

Examiner Only	
Marks	Remark

- (iii) Explain why the value of the enthalpy of combustion obtained from experiments of this type is always greater than the accepted value.

\_\_\_\_\_ [1]

- (iv) Use the average bond enthalpy data in the table below to calculate a value for the enthalpy of combustion of ethanol.



Bond	Average bond enthalpy/ kJ mol <sup>-1</sup>
C—C	347
C—H	413
C=O	799
O—H	467
O=O	495
C—O	358

You are advised to show your working.

\_\_\_\_\_ kJ mol<sup>-1</sup> [4]

- (v) Explain why the enthalpy value in (iv) is different from the accepted value of  $-1370.7 \text{ kJ mol}^{-1}$  for this combustion reaction.

\_\_\_\_\_ [1]

Examiner Only

Marks Remark





(d) The table below shows the percentage of sulfur dioxide ( $\text{SO}_2$ ) which is converted to sulfur trioxide ( $\text{SO}_3$ ) under different conditions.

Percentage of $\text{SO}_2$ converted to $\text{SO}_3$ /%	Temperature/ $^\circ\text{C}$	Pressure/atm
98.5	100	2
99.0	100	100
98.0	400	2
98.5	400	100
55.0	600	2
52.5	600	100
18.0	900	2
17.0	900	100

Use the data in the table above and your knowledge to explain fully why an industrial chemist has chosen to use a temperature of  $400^\circ\text{C}$  and a pressure of 2 atm in this stage of the Contact process.

Temperature: \_\_\_\_\_

\_\_\_\_\_

\_\_\_\_\_

Pressure: \_\_\_\_\_

\_\_\_\_\_

\_\_\_\_\_ [4]

Examiner Only

Marks Remark

**BLANK PAGE**

**(Questions continue overleaf)**

5 Sodium carbonate ( $\text{Na}_2\text{CO}_3$ ) can be used to make a standard solution for volumetric analysis.

(a) (i) What is meant by the term **standard solution**?

\_\_\_\_\_  
\_\_\_\_\_ [1]

(ii) Calculate the mass of sodium carbonate required to make  $1 \text{ dm}^3$  of  $0.100 \text{ mol dm}^{-3}$  solution.

**You are advised to show your working.**

\_\_\_\_\_ g [2]

(b) A standard solution of sodium carbonate with a concentration of  $0.100 \text{ mol dm}^{-3}$  was placed into a conical flask and used in volumetric analysis to find the concentration of a solution of hydrochloric acid. The equation for this reaction is shown below.



(i)  $25.0 \text{ cm}^3$  of the standard solution required  $35.0 \text{ cm}^3$  of the acid for neutralisation to occur. Calculate the concentration of the acid giving your answer to 3 significant figures.

\_\_\_\_\_  $\text{mol dm}^{-3}$  [3]

Examiner Only

Marks Remark

(ii) State **two** ways in which a scientist could ensure that accurate results were obtained for this titration.

1. \_\_\_\_\_

\_\_\_\_\_

2. \_\_\_\_\_

\_\_\_\_\_ [2]

(iii) State **one** way that the scientist could ensure that reliable results were obtained.

\_\_\_\_\_

\_\_\_\_\_ [1]

(c) Indicators are substances that are different colours in acid and alkali. Complete the table below to show the colours of different indicators in acid and alkali.

Indicator	Colour in acid	Colour in alkali
phenolphthalein		
methyl orange		

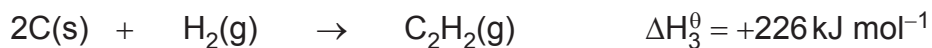
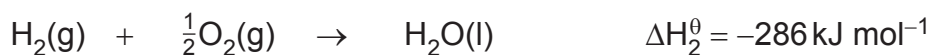
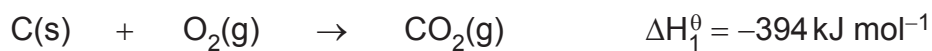
[4]

Examiner Only

Marks Remark

- 6 Ethyne ( $C_2H_2$ ) is used in industry for welding. When it burns in oxygen the flame can reach temperatures of over  $3000^\circ C$ . Ethyne burns to produce carbon dioxide and water.

Below are some enthalpy values involving ethyne and the elements it is made from.



- (a) State Hess's law.

---



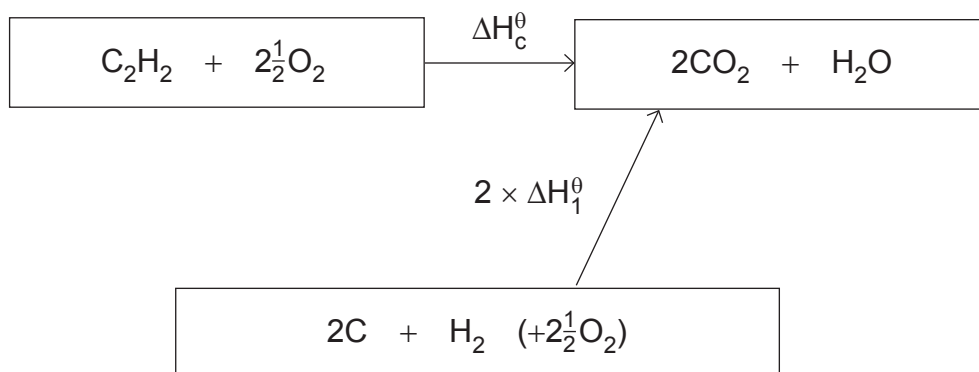
---



---

[2]

- (b) (i) Part of the enthalpy cycle for the combustion of ethyne is shown below. Add arrows with labels to show  $\Delta H_2^\theta$  and  $\Delta H_3^\theta$ .



Examiner Only

Marks Remark

- (ii) Calculate the enthalpy of combustion,  $\Delta H_c^\theta$ , for ethyne.  
Your answer must include the unit.  
**You are advised to show your working.**

\_\_\_\_\_ [3]

- (c) Ethyne is made when calcium carbide ( $\text{CaC}_2$ ) reacts with water. Calcium hydroxide is also produced in this reaction. Construct a balanced symbol equation for this reaction.

\_\_\_\_\_ [3]

---

**THIS IS THE END OF THE QUESTION PAPER**

---

Examiner Only

Marks

Remark

Permission to reproduce all copyright material has been applied for.  
In some cases, efforts to contact copyright holders may have been unsuccessful and CCEA  
will be happy to rectify any omissions of acknowledgement in future if notified.